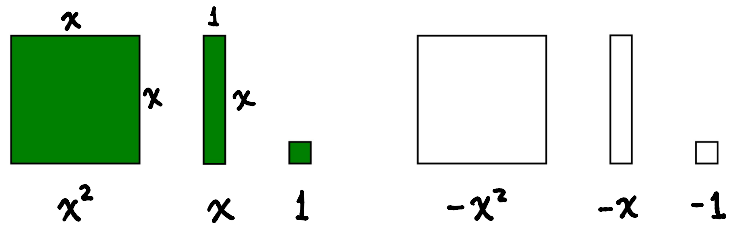



Representing Expressions with Algebra Tiles

Representing Expressions with Algebra Tiles



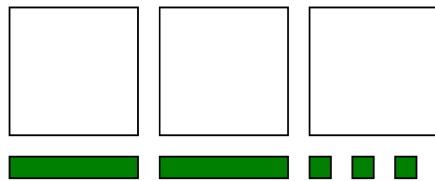
Write the algebraic expression represented by each model.



$$2x^2 + x + 4$$



$$x^2 + 4x - 5$$



$$-3x^2 + 2x + 3$$



$$-2x^2 - 3x + 6$$